




$A = \square \text{ cm}^2$, $P = \square \text{ cm}$. The number in each box is the same. Find the number.

- 11 area = 12 cm^2 , perimeter = 16 cm 12 area = 24 cm^2 , perimeter = 20 cm
13 area = 30 cm^2 , perimeter = 26 cm 14 area = 51 cm^2 , perimeter = 29 cm


Calculate the length and width of rectangles that have:

- 9 $A = 45 \text{ cm}^2$, $L = 90 \text{ mm}$, $W = \square$ 10 $A = 27 \text{ cm}^2$, $W = 4.5 \text{ cm}$, $L = \square$
7 $L = 4 \text{ mm}$, $W = 7 \text{ mm}$, $A = \square$ 8 $A = 120 \text{ cm}^2$, $W = 10 \text{ cm}$, $L = \square$


Calculate the missing measurement of each rectangle. L stands for length, W for width and A for area.



6

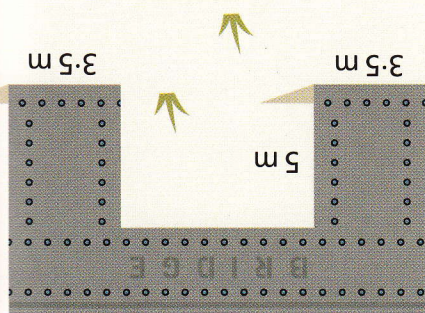


5

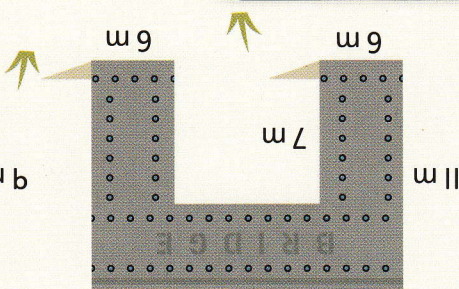


4

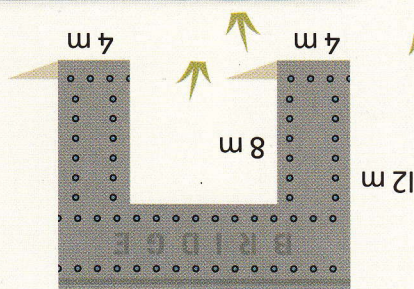
Calculate the area of each patio.



3



2



1

Calculate the area of the side of each bridge.